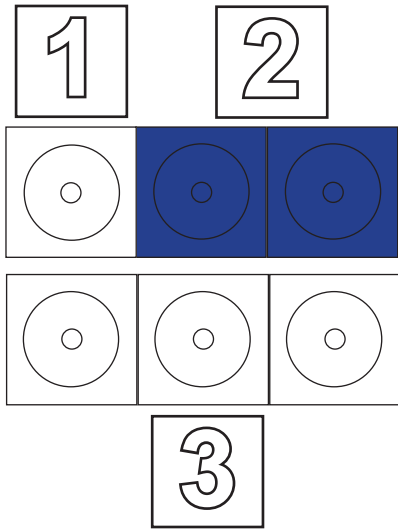
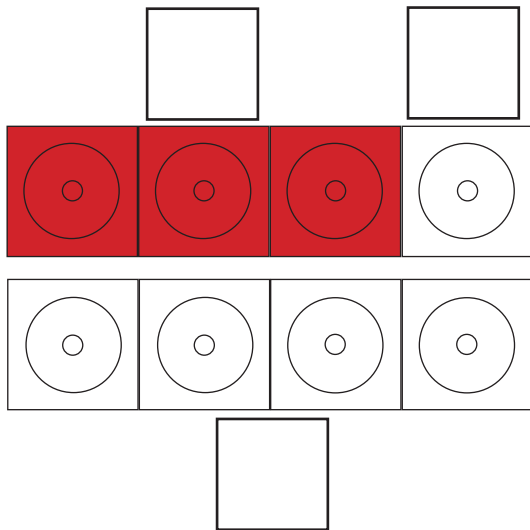




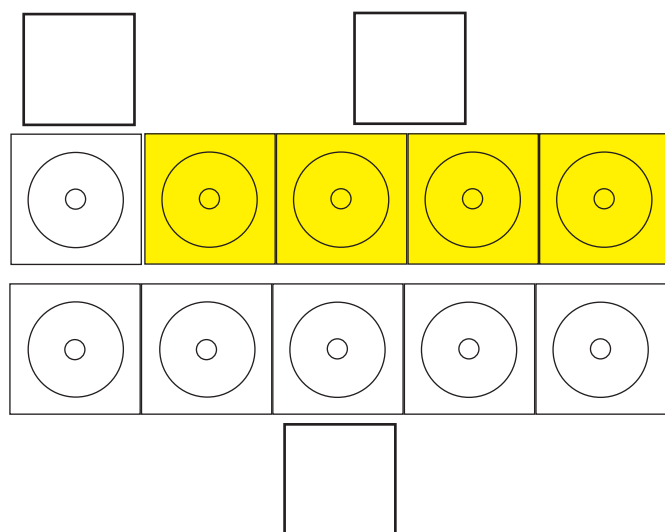
Name: _____



$$1 + \square = \square$$



$$\square + \square = \square$$



$$\square + \square = \square$$

Welche Stäbe werden genutzt?
Trage die Zahlen ein. Löse die Aufgabe.

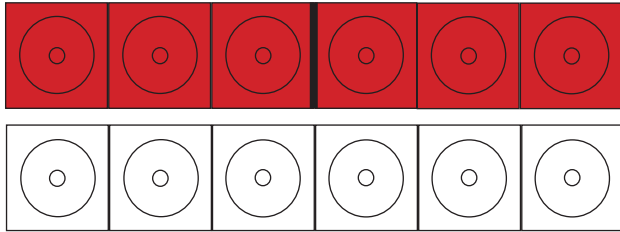




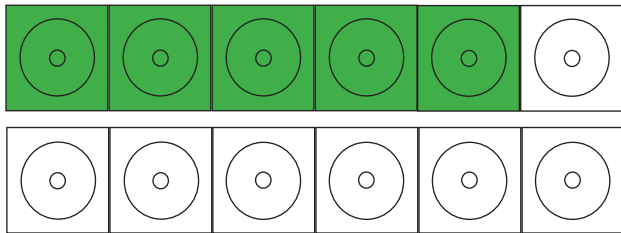
Name: _____



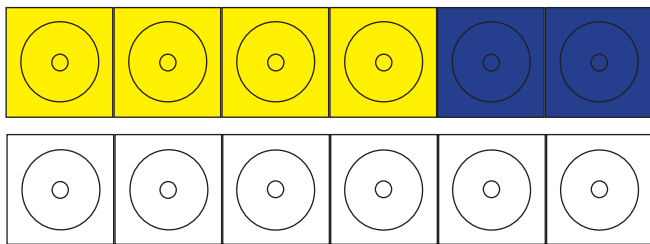
3



$$3 + \square = \square$$



$$\square + \square = \square$$



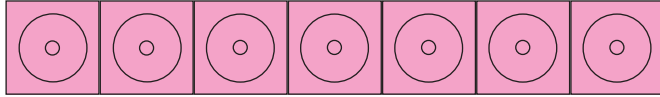
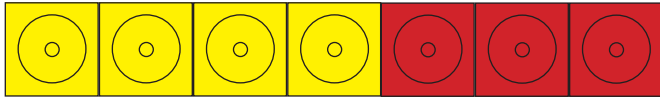
$$\square + \square = \square$$

Welche Stäbe werden genutzt?
Trage die Zahlen ein. Löse die Aufgabe.

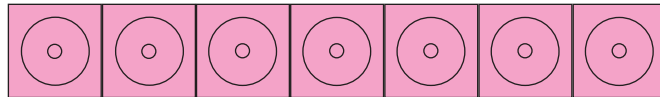
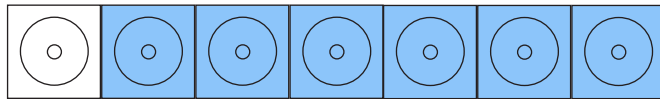





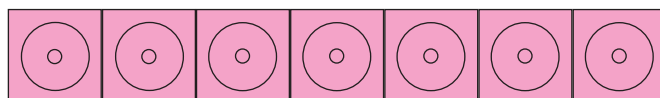

Name: _____



$$\boxed{4} + \square = \square$$



$$\square + \square = \square$$



$$\square + \square = \square$$



Welche Stäbe werden genutzt?
Trage die Zahlen ein. Löse die Aufgabe.

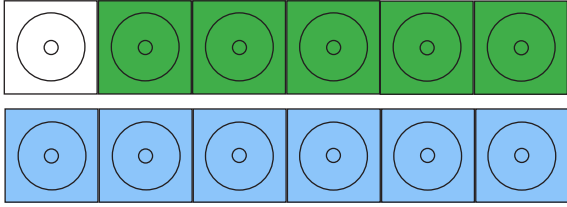




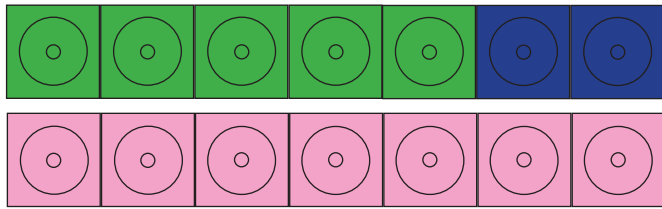
Name: _____



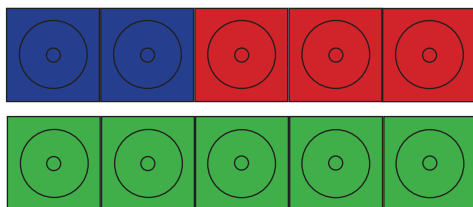
1



$$1 + \square = \square$$



$$\square + \square = \square$$



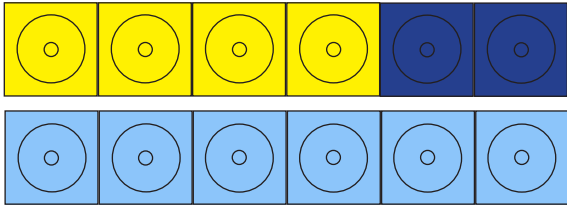

$$\square + \square = \square$$

Welche Stäbe werden genutzt?
Trage die Zahlen ein. Löse die Aufgabe.

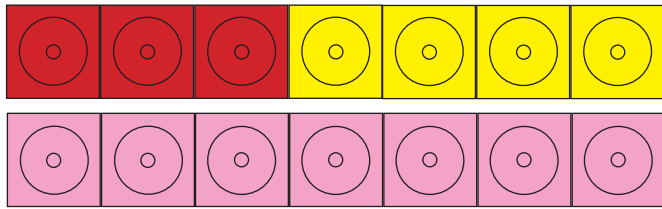





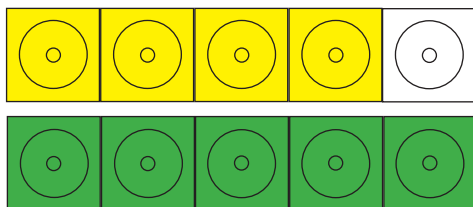

Name: _____



$$\boxed{4} + \square = \square$$



$$\square + \square = \square$$



$$\square + \square = \square$$



Welche Stäbe werden genutzt?
Trage die Zahlen ein. Löse die Aufgabe.



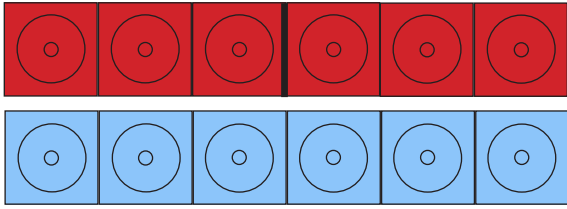


Name: _____



3

□

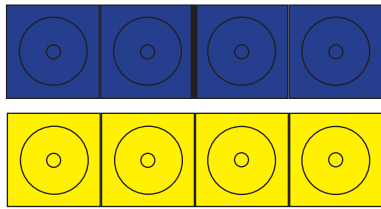


□

$$3 + \square = \square$$

□

□

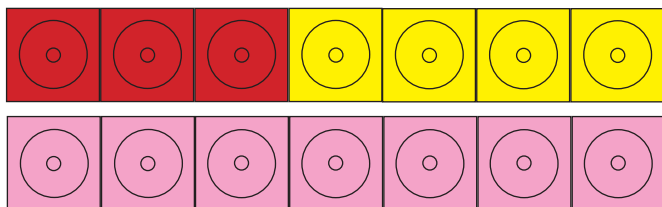


□

$$\square + \square = \square$$

□

□



□

$$\square + \square = \square$$

Welche Stäbe werden genutzt?
Trage die Zahlen ein. Löse die Aufgabe.

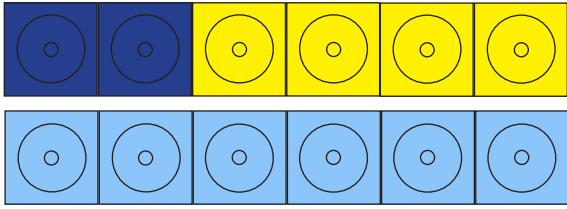




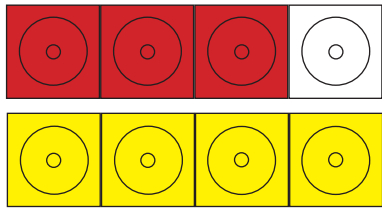
Name: _____



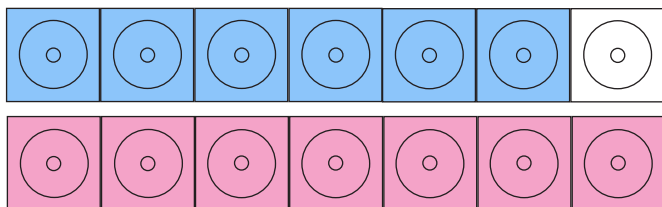
2



$$2 + \square = \square$$



$$\square + \square = \square$$




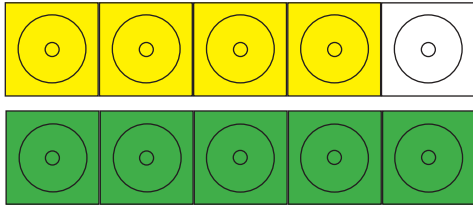
$$\square + \square = \square$$

Welche Stäbe werden genutzt?
Trage die Zahlen ein. Löse die Aufgabe.

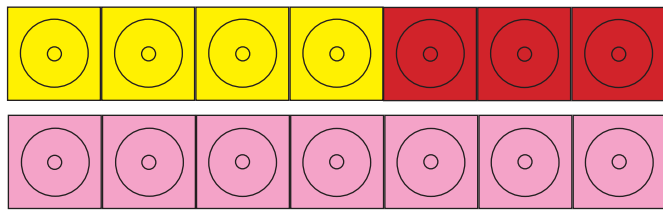




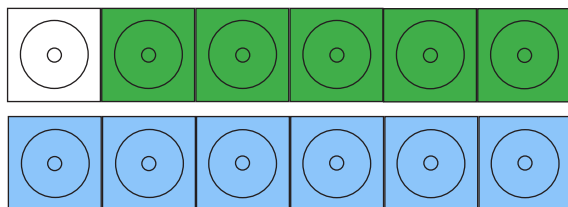
Name: _____



$$\boxed{4} + \square = \square$$



$$\square + \square = \square$$



$$\square + \square = \square$$

Welche Stäbe werden genutzt?
Trage die Zahlen ein. Löse die Aufgabe.



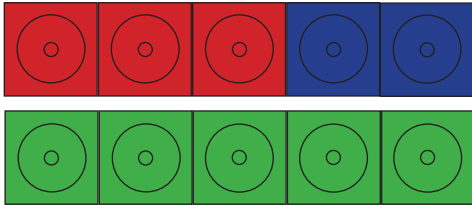


Name: _____



3

□

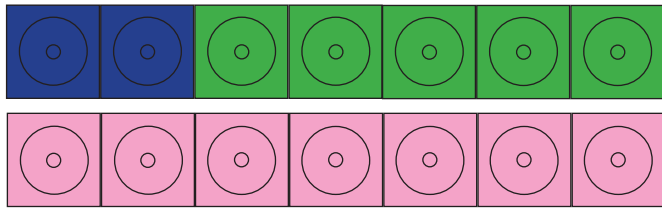


□

$$3 + \square = \square$$

□

□

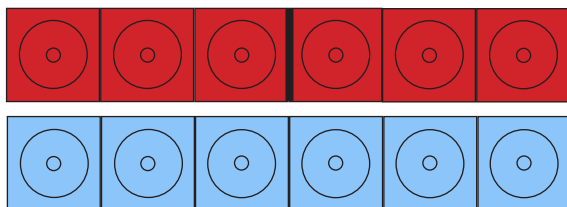


□

$$\square + \square = \square$$

□

□



□

$$\square + \square = \square$$

Welche Stäbe werden genutzt?
Trage die Zahlen ein. Löse die Aufgabe.

